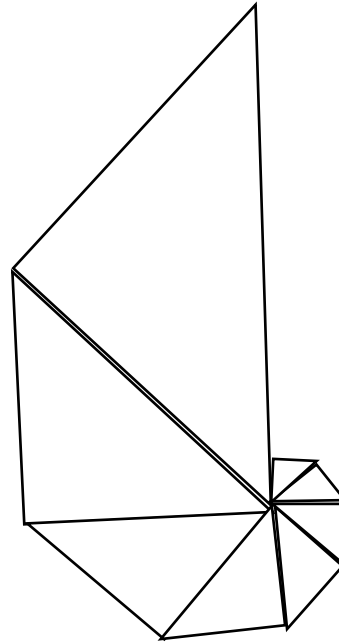


Name: \_\_\_\_\_ Per: \_\_\_\_\_ Date: \_\_\_\_\_

### Conch Shell Answer Sheet

Triangle	Hypotenuse Length	Side (Leg) Length
A		
B		
C		
D		
E		
F		
G		
H		



What did you notice about finding the missing sides? Did you come up with a way that made this easier for you?

---

---

---

---

---

---

---

What did you find most challenging about this activity? What did you enjoy the most about it?

---

---

---

---

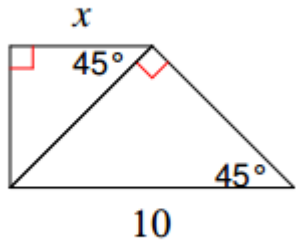
---

---

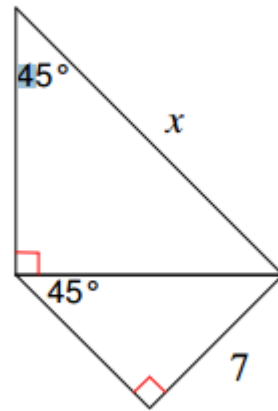
---

Multiple Triangle Practice 🙌❤

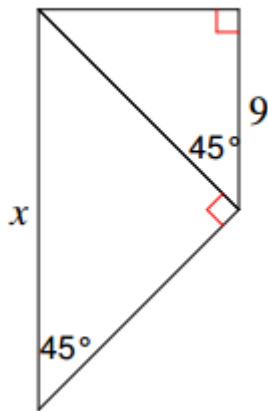
1)



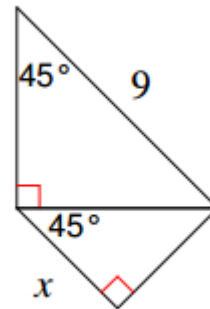
2)



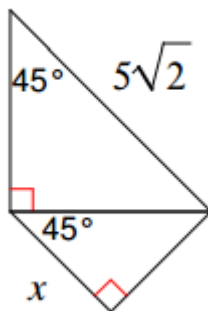
3)



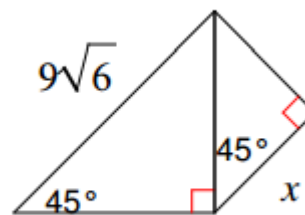
4)



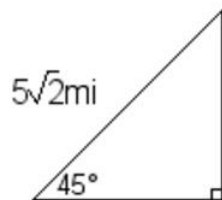
5)



6)



Bonus:



Suzy is driving up a hill at an incline of  $45^\circ$ . She will travel  $5\sqrt{2}$  miles to reach the top. How high is the hill?