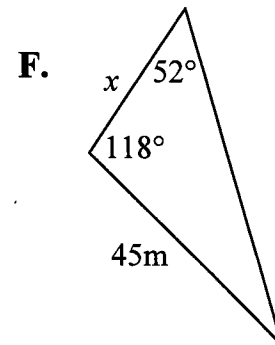
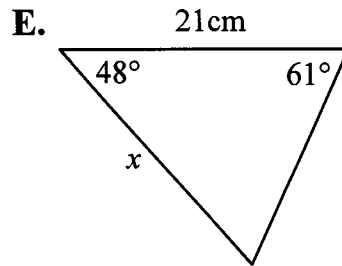
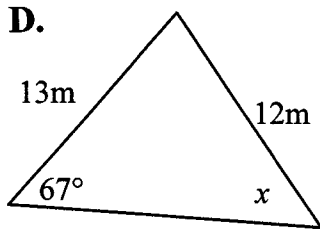
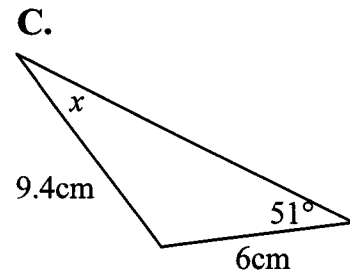
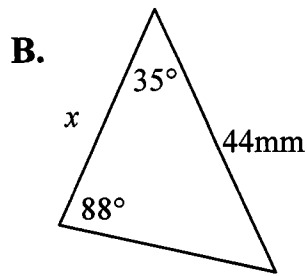
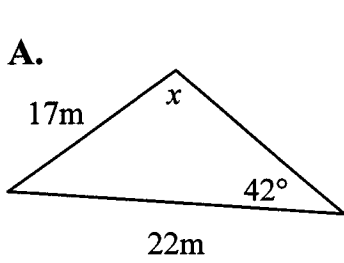
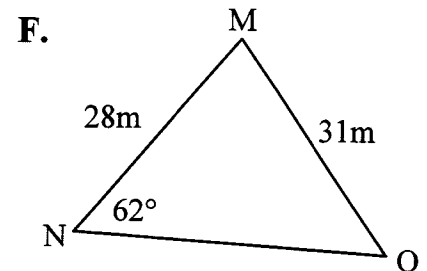
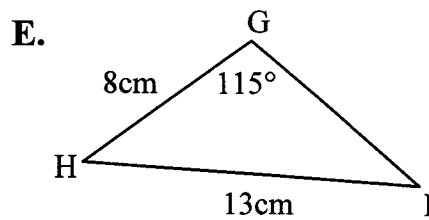
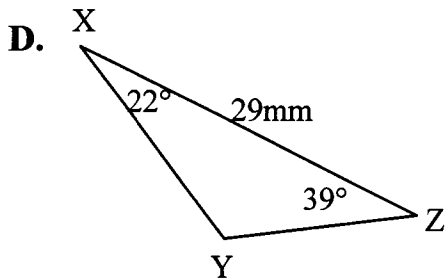
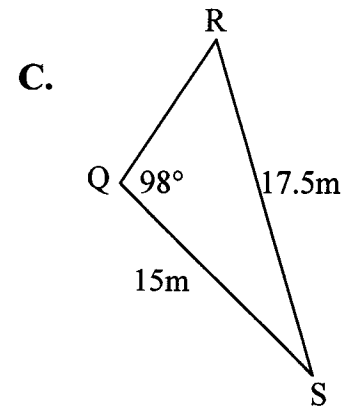
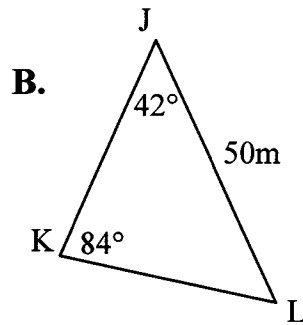
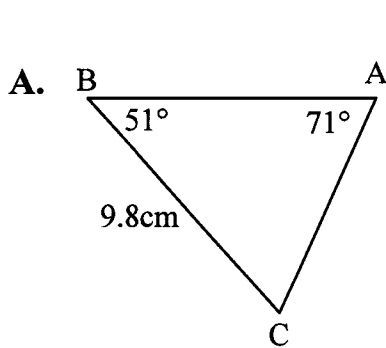


# SINE LAW WORKSHEET

1. Solve for the unknown in each triangle. Round to the nearest tenth.



2. Solve for **all** missing sides and angles in each triangle. Round to the nearest tenth.



Name: \_\_\_\_\_ Per: \_\_\_\_\_ Date: \_\_\_\_\_

Law of Sines Answer Sheet

1A.	1B.	1C.
1D.	1E.	1F.

2A. A = _____ a = _____ B = _____ b = _____	2B. J = _____ j = _____ K = _____ k = _____
---	---

2C.

Q = \_\_\_\_\_ q = \_\_\_\_\_

R = \_\_\_\_\_ r = \_\_\_\_\_

2D.

X = \_\_\_\_\_ x = \_\_\_\_\_

Y = \_\_\_\_\_ y = \_\_\_\_\_

2E.

G = \_\_\_\_\_ g = \_\_\_\_\_

I = \_\_\_\_\_ i = \_\_\_\_\_

2F.

N = \_\_\_\_\_ n = \_\_\_\_\_

O = \_\_\_\_\_ o = \_\_\_\_\_